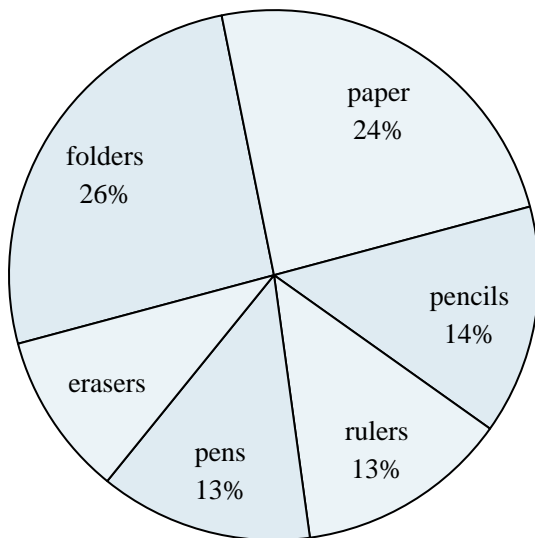




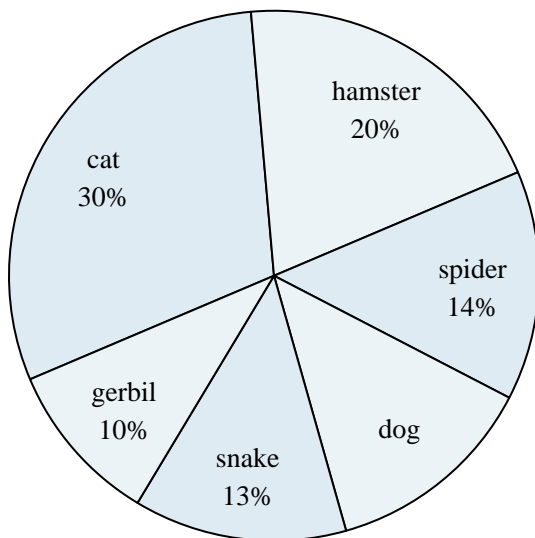
Use the graph to solve.

School Store Sales



- 1) Which two products accounted for about half the sales?
- 2) Which product sold the worst?
- 3) What percent of the sales were paper?
- 4) What is the combined amount of pencils and rulers sold?
- 5) Which product sold the best?

Favorite Pet



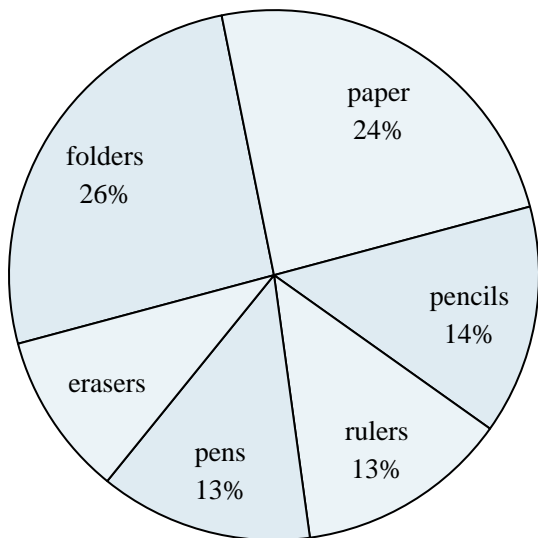
- 6) Which pet did the greatest number of people like?
- 7) What percent of people said the gerbil was their favorite pet?
- 8) Which pet did the least amount of people say was their favorite?
- 9) Which two pets did about half the people say was their favorite?
- 10) What percent of people preferred either the hamster or the dog?

Answers

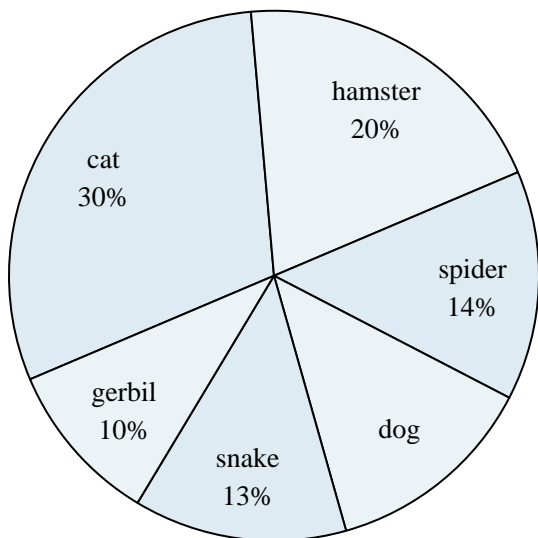
1. _____
2. _____
3. _____
4. _____
5. _____
6. _____
7. _____
8. _____
9. _____
10. _____



Use the graph to solve.

School Store Sales

- 1) Which two products accounted for about half the sales?
- 2) Which product sold the worst?
- 3) What percent of the sales were paper?
- 4) What is the combined amount of pencils and rulers sold?
- 5) Which product sold the best?

Favorite Pet

- 6) Which pet did the greatest number of people like?
- 7) What percent of people said the gerbil was their favorite pet?
- 8) Which pet did the least amount of people say was their favorite?
- 9) Which two pets did about half the people say was their favorite?
- 10) What percent of people preferred either the hamster or the dog?

Answers

1. **folders & paper**
2. **erasers**
3. **24%**
4. **27%**
5. **folders**
6. **cat**
7. **10%**
8. **gerbil**
9. **cat & hamster**
10. **33%**